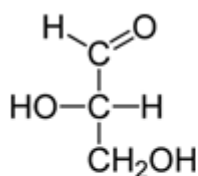
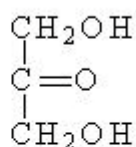


## Esercizi: ibridazione, risonanza

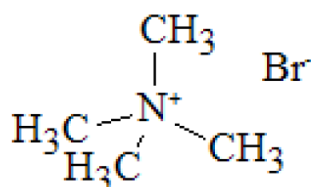
Disegnare le strutture complete di Lewis delle seguenti molecole. Identificare il tipo di ibridazione degli atomi di C, O, N. Scrivere le eventuali strutture di risonanza.



GLICERALDEIDE



DIIDROSSIACETONE

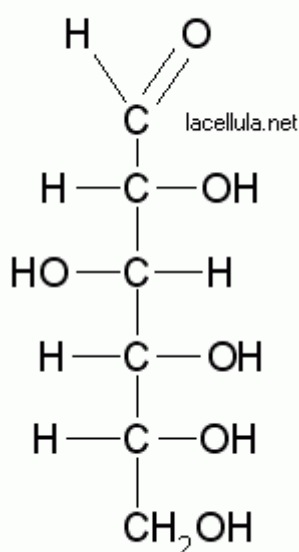


ione tetrametilammonio

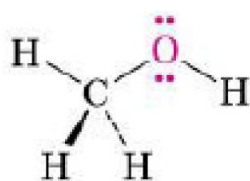


2-propen-1-olo

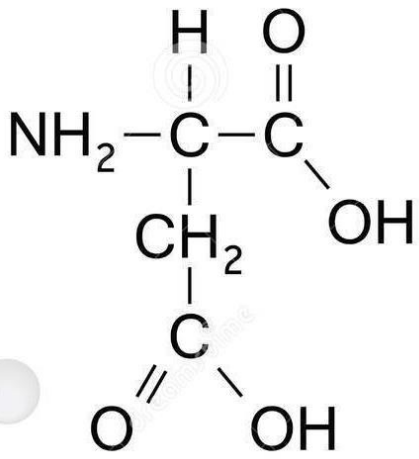
### Glucosio lineare



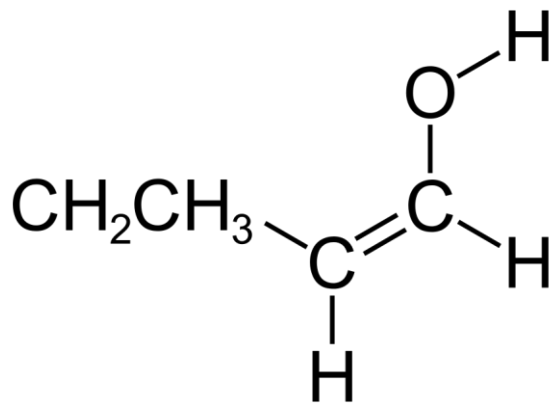
glucosio



Metanolo



Acido aspartico



1-buten-1-olo