

Un laminato ha la seguente struttura:

$[+45/-45]_T$

E' costituito da lamine di materiale composito a fibre unidirezionali di carbonio, in matrice epossidica, con spessore pari a 0.25 mm

Le caratteristiche delle lamine sono le seguenti:

- Modulo elastico fibre: 200 GPa
- Modulo elastico matrice: 12 GPa
- Modulo di Poisson matrice: 0.3
- Modulo di Poisson fibre: 0.25
- Modulo di taglio matrice: 4.5 GPa
- Modulo di taglio fibre (ν_{12}): 5 GPa
- Frazione volumetrica fibre: 0.6

Scrivere la relazione costitutiva del laminato.

1. Determinazione delle costanti elastiche della lamina nel sistema di riferimento di ortotropia (modulo 5, pag. 9, pag. 42 ecc.):

$$E_{11} = E_f \cdot V_f + E_m \cdot V_m$$

$$\nu_{12} = \nu_{f12} \cdot V_f + \nu_m \cdot V_m$$

$$\frac{1}{E_{22}} = \frac{V_m}{E_m} + \frac{V_f}{E_f}$$

$$\frac{E_{11}}{E_{22}} = \frac{\nu_{12}}{\nu_{21}}$$

$$E = 2G(1 + \nu)$$

$$\nu = E/2G - 1$$

$$\nu_m = 12/(2 * 4.5) - 1 = 0.33$$

$$G_{12} = G_{13} = \frac{G_m}{1 - \sqrt{V_f}(1 - G_m/G_{f12})}$$

$$E_1 = 200 * 0.6 + 12 * (1 - 0.6) = 120 + 4.8 = 124.8 \text{ GPa}$$

$$E_2 = 1 / (0.4 / 12 + 0.6/200) = 27.5 \text{ GPa}$$

$$\nu_{12} = 0.25 * 0.6 + 0.33 * 0.4 = 0.28$$

$$\nu_{21} = \nu_{12} * E_2/E_1 \text{ (pag. 19, modulo 6)} = 0.28 * (27.5/124.8) = 0.06$$

$$G_{12} (G_6) = 4.5 / (1 - 0.6^{1/2} * (1 - 4.5 / 5)) = 4.9 \text{ GPa}$$

2. Determinazione della matrice Q, stress piano (modulo 6, pag. 19):

$$Q_{11} = \frac{E_1}{1 - \nu_1\nu_2} \quad Q_{22} = \frac{E_2}{1 - \nu_1\nu_2} \quad Q_{12} = \frac{\nu_1 E_2}{1 - \nu_1\nu_2} = \frac{\nu_2 E_1}{1 - \nu_1\nu_2} \quad Q_{66} = G_6$$

$$Q_{11} = 124.8 / (1 - 0.28*0.06) = 122.7 \text{ GPa}$$

$$Q_{22} = 27.5 / (1 - 0.28*0.06) = 27 \text{ GPa}$$

$$Q_{12} = 0.28 * 27.5 / (1 - 0.28*0.06) = 7.6 \text{ GPa}$$

$$Q_{66} = 4.9 \text{ GPa}$$

$$Q = \begin{pmatrix} 122.7 & 7.6 & 0 \\ 7.6 & 27.0 & 0 \\ 0 & 0 & 4.9 \end{pmatrix} \text{ [GPa]}$$

3. Determinazione delle matrici di rotazione per gli angoli $+45^\circ$ e -45° (modulo 6, pag. 12):

$$[T]_\sigma^{-1} = \begin{bmatrix} m^2 & n^2 & -2mn \\ n^2 & m^2 & 2mn \\ mn & -mn & m^2 - n^2 \end{bmatrix} \quad [T]_\varepsilon = \begin{bmatrix} m^2 & n^2 & mn \\ n^2 & m^2 & -mn \\ -2mn & 2mn & m^2 - n^2 \end{bmatrix} \quad \begin{array}{l} m = \cos \theta \\ n = \sin \theta \end{array}$$

$+45^\circ$

$$[T]_\sigma^{-1} = \left(\begin{array}{c} \left[\phantom{\begin{matrix} m^2 & n^2 & -2mn \\ n^2 & m^2 & 2mn \\ mn & -mn & m^2 - n^2 \end{matrix}} \right] \\ \left[\phantom{\begin{matrix} m^2 & n^2 & -2mn \\ n^2 & m^2 & 2mn \\ mn & -mn & m^2 - n^2 \end{matrix}} \right] \end{array} \right)$$

-45°

$$[T]_\sigma^{-1} = \left(\begin{array}{c} \left[\phantom{\begin{matrix} m^2 & n^2 & -2mn \\ n^2 & m^2 & 2mn \\ mn & -mn & m^2 - n^2 \end{matrix}} \right] \\ \left[\phantom{\begin{matrix} m^2 & n^2 & -2mn \\ n^2 & m^2 & 2mn \\ mn & -mn & m^2 - n^2 \end{matrix}} \right] \end{array} \right)$$

4. Determinazione della matrice \bar{Q} , stress piano (modulo 6, pag. 14):

$$\bar{Q}_{11} = Q_{11}m^4 + 2(Q_{12} + 2Q_{66})m^2n^2 + Q_{22}n^4$$

$$\bar{Q}_{12} = (Q_{11} + Q_{22} - 4Q_{66})m^2n^2 + Q_{12}(m^4 + n^4)$$

$$\bar{Q}_{22} = Q_{11}n^4 + 2(Q_{12} + 2Q_{66})m^2n^2 + Q_{22}m^4$$

$$\bar{Q}_{16} = (Q_{11} - Q_{12} - 2Q_{66})m^3n + (Q_{12} - Q_{22} + 2Q_{66})mn^3$$

$$\bar{Q}_{26} = (Q_{11} - Q_{12} - 2Q_{66})mn^3 + (Q_{12} - Q_{22} + 2Q_{66})m^3n$$

$$\bar{Q}_{66} = (Q_{11} + Q_{22} - 2Q_{12} - 2Q_{66})m^2n^2 + Q_{66}(m^4 + n^4)$$

$$m = \cos \theta$$

$$n = \sin \theta$$

+45°

-45°

$$\bar{Q} = \begin{pmatrix} 46.1 & 36.3 & 23.9 \\ 36.3 & 46.1 & 23.9 \\ 23.9 & 23.9 & 33.6 \end{pmatrix}$$

[GPa]

$$\bar{Q} = \begin{pmatrix} 46.1 & 36.3 & -23.9 \\ 36.3 & 46.1 & -23.9 \\ -23.9 & -23.9 & 33.6 \end{pmatrix}$$

[GPa]

5. Assemblaggio (modulo 6, da pag. 30 in poi):

$$[\sigma]_k = [\bar{Q}]_k [\varepsilon]_k$$


$$\begin{bmatrix} N \\ M \end{bmatrix} = \begin{bmatrix} A & B \\ B & D \end{bmatrix} \begin{bmatrix} \varepsilon^0 \\ K \end{bmatrix}$$

$$A_{ij} = \sum_{k=1}^n (\bar{Q}_{ij})_k (h_k - h_{k-1})$$

$$B_{ij} = \frac{1}{2} \sum_{k=1}^n (\bar{Q}_{ij})_k (h_k^2 - h_{k-1}^2)$$

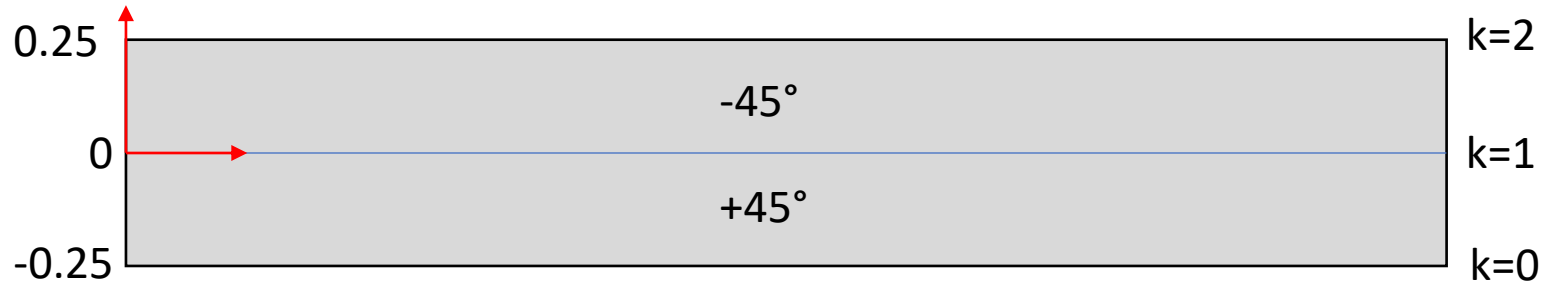
$$D_{ij} = \frac{1}{3} \sum_{k=1}^n (\bar{Q}_{ij})_k (h_k^3 - h_{k-1}^3)$$

$$\begin{bmatrix} A & B \\ B & D \end{bmatrix} =$$



Spessore lamina: 0.25 mm
 Layup: [+45/-45]_T

$$B_{ij} = \frac{1}{2} \sum_{k=1}^n (\bar{Q}_{ij})_k (h_k^2 - h_{k-1}^2)$$

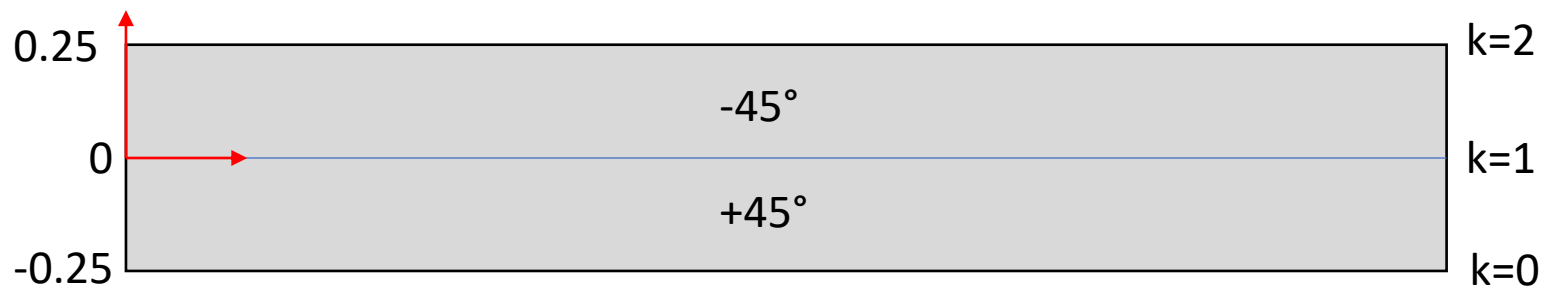


$$\mathbf{B} = \begin{bmatrix} 46.1 & 36.3 & 23.9 \\ 36.3 & 46.1 & 23.9 \\ 23.9 & 23.9 & 33.6 \end{bmatrix} \text{ [GPa]} \cdot 0.5 \cdot (-0.0625) + \begin{bmatrix} 46.1 & 36.3 & -23.9 \\ 36.3 & 46.1 & -23.9 \\ -23.9 & -23.9 & 33.6 \end{bmatrix} \cdot 0.5 \cdot 0.0625 = \begin{bmatrix} 0 & 0 & -1.5 \\ 0 & 0 & -1.5 \\ -1.5 & -1.5 & 0 \end{bmatrix}$$

\uparrow *1E-6 [m²] \uparrow *1E-6 [m²] Elimino coeff. 1E-6
 [kN]
 [N]

Spessore lamina: 0.25 mm
 Layup: [+45/-45]_T

$$D_{ij} = \frac{1}{3} \sum_{k=1}^n (\bar{Q}_{ij})_k (h_k^3 - h_{k-1}^3)$$



$$D = \begin{bmatrix} 46.1 & 36.3 & 23.9 \\ 36.3 & 46.1 & 23.9 \\ 23.9 & 23.9 & 33.6 \end{bmatrix} \begin{matrix} \\ \\ \end{matrix} \begin{matrix} *0.33*0.0156 + \\ \\ \\ \end{matrix} \begin{bmatrix} 46.1 & 36.3 & -23.9 \\ 36.3 & 46.1 & -23.9 \\ -23.9 & -23.9 & 33.6 \end{bmatrix} \begin{matrix} \\ \\ \\ \end{matrix} \begin{matrix} *0.33*0.0156 = \\ \\ \\ \end{matrix} \begin{bmatrix} 0.48 & 0.38 & 0 \\ 0.38 & 0.48 & 0 \\ 0 & 0 & 0.35 \end{bmatrix}$$

[GPa]
*1E-9 [m³]
*1E-9 [m³]
Elimino coeff. 1E-6 [N*m] [mN/mm]

5. Assemblaggio (modulo 6, da pag. 30 in poi):

$$[\sigma]_k = [\bar{Q}]_k [\varepsilon]_k$$

$$\begin{bmatrix} N \\ M \end{bmatrix} = \begin{bmatrix} A & B \\ B & D \end{bmatrix} \begin{bmatrix} \varepsilon^0 \\ K \end{bmatrix}$$

$$\begin{bmatrix} A & B \\ B & D \end{bmatrix} = \left(\begin{array}{ccc|ccc} 23.1 & 18.1 & 0 & 0 & 0 & -1.5 \\ 18.1 & 23.1 & 0 & 0 & 0 & -1.5 \\ \hline 0 & 0 & 16.8 & -1.5 & -1.5 & 0 \\ 0 & 0 & -1.5 & 0.48 & 0.38 & 0 \\ 0 & 0 & -1.5 & 0.38 & 0.48 & 0 \\ -1.5 & -1.5 & 0 & 0 & 0 & 0.35 \end{array} \right)$$

$$A_{ij} = \sum_{k=1}^n (\bar{Q}_{ij})_k (h_k - h_{k-1})$$

$$B_{ij} = \frac{1}{2} \sum_{k=1}^n (\bar{Q}_{ij})_k (h_k^2 - h_{k-1}^2)$$

$$D_{ij} = \frac{1}{3} \sum_{k=1}^n (\bar{Q}_{ij})_k (h_k^3 - h_{k-1}^3)$$

Opzionale: invertire l'equazione costitutiva del laminato. Considerando un laminato di dimensioni pari a $200 \times 200 \text{ mm}^2$, applicare una forza pari a 20 N in direzione x, distribuendola sulla larghezza del laminato.

Calcolare le deformazioni del laminato.

Scilab:

```
ABD=[
23.1e-3, 18.1e-3, 0e-3, 0e-6, 0e-6, -1.5e-6;
18.1e-3, 23.1e-3, 0e-3, 0e-6, 0e-6, -1.5e-6;
0e-3, 0e-3, 16.8e-3, -1.5e-6, -1.5e-6, 0e-6;
0e-6, 0e-6, -1.5e-6, 0.48e-9, 0.38e-9, 0e-9;
0e-6, 0e-6, -1.5e-6, 0.38e-9, 0.48e-9, 0e-9;
-1.5e-6, -1.5e-6, 0e-6, 0e-9, 0e-9, 0.35e-9
];
```

```
_ABD = inv(ABD);
```

(la matrice va eventualmente scalata)

```
Vettore forze: [20/0.2,0,0,0,0,0] = [100,0,0,0,0,0]
```

```
F = [100E-6;0;0;0;0;0];
```

```
DEF = _ABD*F
```

```
DEF =
```

```
0.0117641
- 0.0082359
0.
0.
0.
```

Queste sono le ε

15.120968

TORSIONE