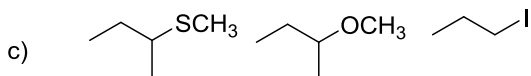
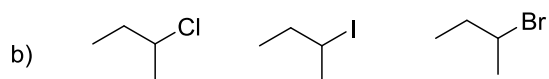
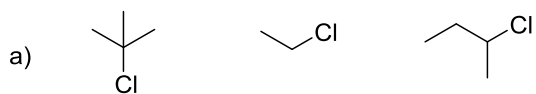
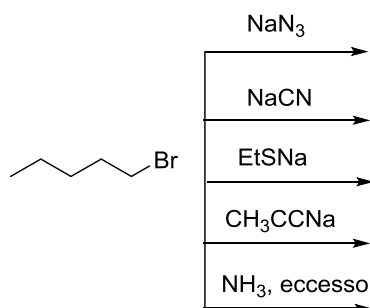


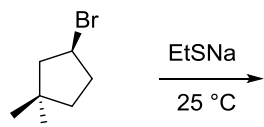
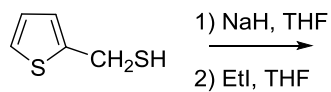
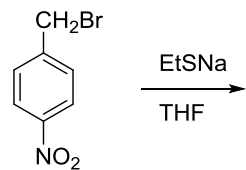
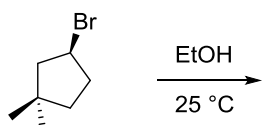
1) Disporre in ordine di reattività crescente nei confronti della reazione di SN2:



2) Scrivere i prodotti delle seguenti reazioni



3) Completare le reazioni indicando il meccanismo e la stereochemica



4) Completare le reazioni e discutere il meccanismo:

