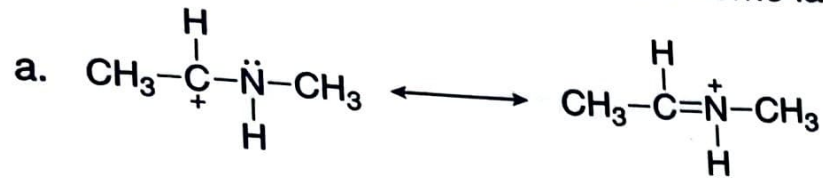
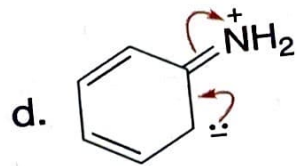
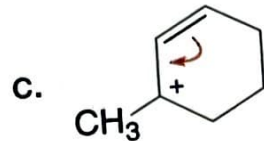
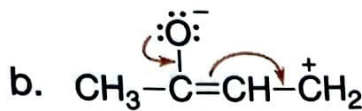
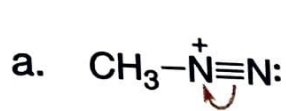


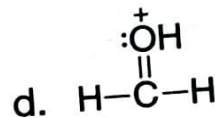
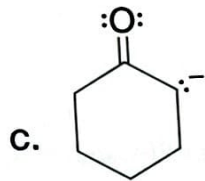
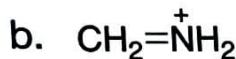
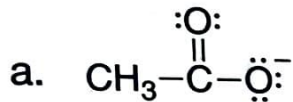
1.43 Aggiungi le frecce curve per mostrare come la prima struttura di risonanza può essere convertita nella seconda



1.44 Segui le frecce curve per disegnare la seconda struttura di risonanza di ciascuna specie.



1.45 Disegna una seconda struttura di risonanza per ogni ione.



1.46 Per ciascuno ione del Problema 1.45 disegna l'ibrido di risonanza.